


Name: \_\_\_\_\_


Date: \_\_\_\_\_

## 2 Dimensional Shapes




Identify 2 dimensional shapes.

a.



\_\_\_\_\_

b.



\_\_\_\_\_

c.



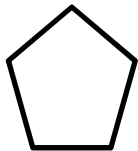
\_\_\_\_\_

d.



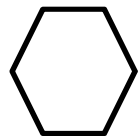
\_\_\_\_\_

e.



\_\_\_\_\_

f.



\_\_\_\_\_

## 2 Dimensional Shapes - ANSWER KEY



Identify 2 dimensional shapes.

