






Name: _____

Date: _____



Dolls Pictograph

Dolls owned by girls

Name	Number of dolls
Angelina	
Cathie	
Jade	
Niccole	
Janet	








= 3 Dolls

1. How many dolls does Cathie have? _____
2. How many dolls does Jade have? _____
3. How many dolls does Niccole have? _____
4. Who has the most dolls? _____
5. Who has the fewest dolls? _____
6. Who has more dolls Angelina or Jade? _____
7. How many more dolls does Janet have than Cathie? _____
8. Does any girl have same number of dolls? _____



Dolls Pictograph - ANSWER KEY

Dolls owned by girls

Name	Number of dolls
Angelina	 12
Cathie	 6
Jade	 9
Niccole	 3
Janet	 15



= 3 Dolls

1. How many dolls does Cathie have? 6
2. How many dolls does Jade have? 9
3. How many dolls does Niccole have? 3
4. Who has the most dolls? Janet
5. Who has the fewest dolls? Niccole
6. Who has more dolls Angelina or Jade? Angelina
7. How many more dolls does Janet have than Cathie? 9
8. Does any girl have same number of dolls? NO