

Name: _____

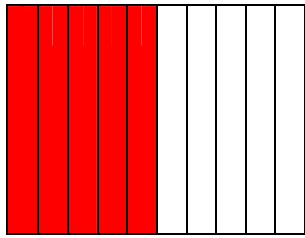
Date: _____



Decimals – Tenths

Write the decimal and the fraction of the shaded portion in each square.

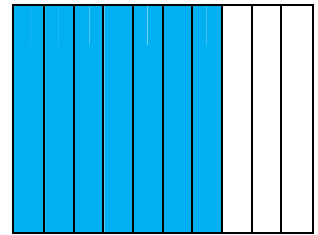
a.



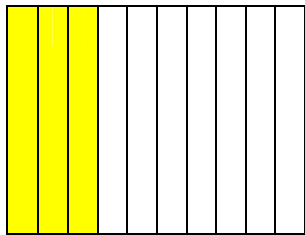
b.




c.



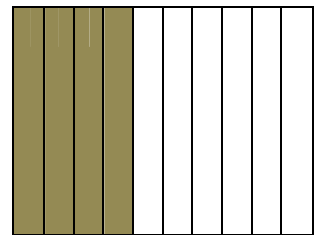
d.




e.




f.



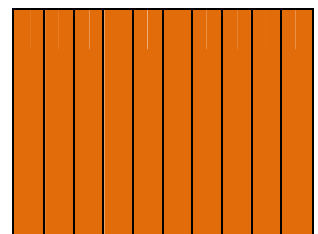
g.



h.



i.

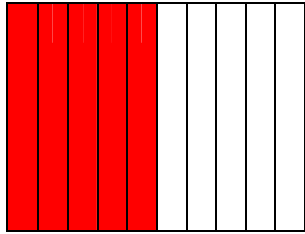


Decimals – Tenths - ANSWER KEY



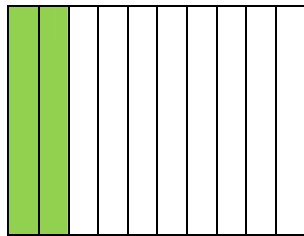
Write the decimal and the fraction of the shaded portion in each square.

a.



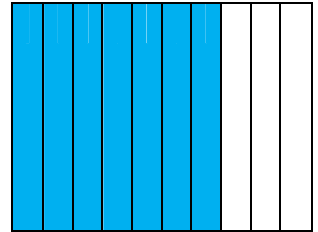
0.5 5/10

b.



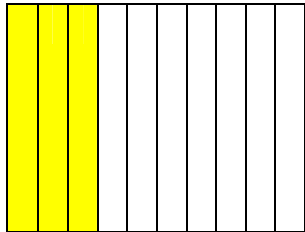
0.2 2/10

c.




0.7 7/10

d.




0.3 3/10

e.




0.9 9/10

f.




0.4 4/10

g.



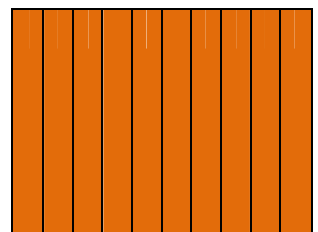
0.0 0/10

h.



0.1 1/10

i.



1.0 10/10